

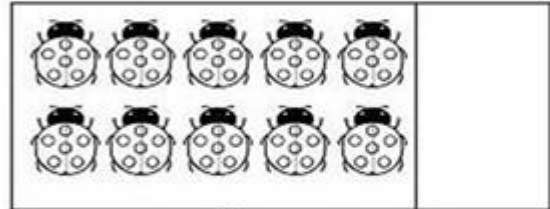



01. ESCREVA OS NÚMEROS QUE ESTÃO FALTANDO:

0					5				
----------	--	--	--	--	----------	--	--	--	--

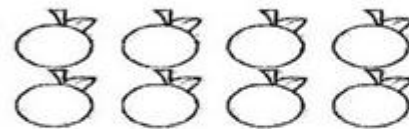

02. ESCREVA O NUMERAL CORRESPONDENTE:



03. CIRCULE APENAS OS NUMERAIS:



3 A 4 S D T 6 5 \$

04. PINTE O NUMERAL QUE CORRESPONDE A QUANTIDADE DE ELEMENTOS:



4	7	5	9
---	---	---	---

2	3	5	8
---	---	---	---



4	10	6	12
---	----	---	----

4	7	5	9
---	---	---	---

4	7	2	9
---	---	---	---

NOME: _____

DATA: **13/04/2021**

JARDIM II - Prof.ª _____